

Centre Number	Candidate Number										

Candidate Name: _____

EXAMINATIONS COUNCIL OF ZAMBIA
Examination for School Certificate Ordinary Level

Physics **5054/2**

PAPER 2

Wednesday **14 OCTOBER 2015**

Additional materials:
 Graph paper
 Electronic calculator
 Mathematical tables
 Answer Booklet

Time: 2 hours

Instructions to candidates

Write your name, centre number and candidate number in the spaces provided at the top of this page and on any separate Answer Booklet/paper used.

Section A

Answer **all** questions.

Write your answers in the spaces provided on the question paper.

Section B

Answer **any three** questions.

Write your answers on the separate Answer Booklet provided.

At the end of the examination:

- 1 fasten separate Answer Booklets used securely to the question paper,
- 2 tick the numbers of the Section **B** questions you have answered in the grid below.

Information for candidates

The number of marks is given in brackets [] at the end of each question or part question. Candidates are reminded that **all** quantitative answers should include appropriate units.

Tick the questions answered in **Section B** in the grid.

Candidates are advised to **show all their working** in a clear and orderly manner, as more marks are awarded for

Candidate's Use	Examiner's Use
Section A	
Section B 9	
10	
11	
12	
TOTAL	

SECTION A
[50 marks]

Answer **all** the questions.

- 1** **Figure 1.1** shows a simple pendulum suspended from a clamp stand. The bob is pulled slightly to one side at position A and then released.

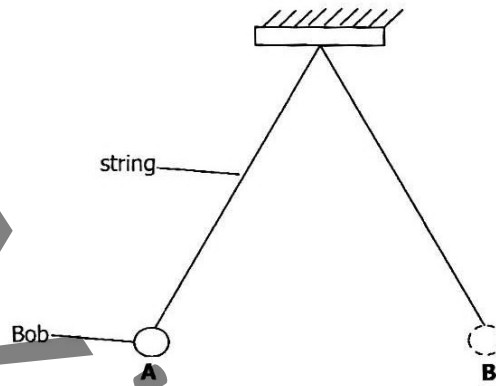


Figure 1.1

- (a) What energy changes take place between A and B?
..... [1]
- (b) Describe briefly how you would use a stop clock to determine the period of oscillation of the pendulum.
.....
.....
..... [3]
- (c) The following values of time for 20 oscillations were obtained:
16.1 15.9 16.0 16.2 15.8
Determine the period of the pendulum.
.....
..... [2]

Total [6]

2

A bus driver saw a boy crossing the road ahead and applied emergency brakes. During his reaction time, the bus travelled at a steady speed and then slowed down until it finally stopped. **Figure 2.1** shows the graph of the motion of the bus.

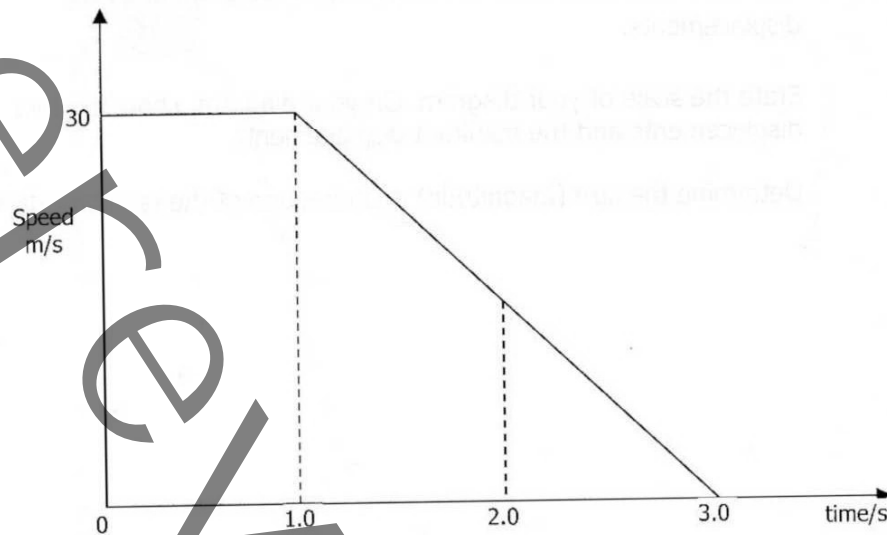


Figure 2.1

From the graph,

- (a) calculate the distance covered during the reaction time.

.....

 [2]

- (b) find the deceleration of the bus.

.....

 [2]

- (c) determine the force provided by the brakes if the average mass of the bus was 1 600kg.

.....

 [2]

Total [6]

[Turn over

3 A journey consists of two displacements. The first is 500m in the northerly direction and the second is 200m in an easterly direction.

(a) In the space below, draw to scale a vector diagram of these displacements. [2]

State the scale of your diagram. On your diagram, show the two displacements and the resultant displacement.

Determine the size (magnitude) and direction of the resultant displacement.



Scale

Size

Direction [3]

(b) Another journey covers a distance of 700m. Describe how possible it is that this journey has no resultant displacement.

.....

..... [1]

Total [6]

4 **Figure 4.1** shows a ball just before sliding down a smooth slope.

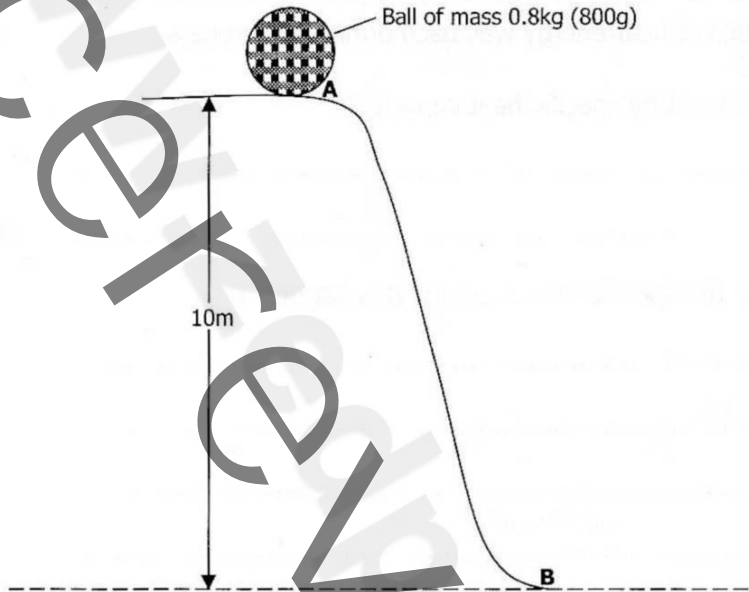


Figure 4.1

(a) What is the potential energy of the ball at A?

.....
..... [2]

(b) What is the kinetic energy of the ball as it reaches B?

.....
..... [1]

(c) Find its velocity as it reaches B.

.....
..... [2]

(d) State the law of conservation of energy.

.....
..... [1]

5 (a) In an experiment to determine the specific heat capacity of substance K, 50g of the substance was heated and the temperature rose from 20°C to 65°C in 20 minutes. 9180J of heat energy was used during the process.

(i) What is meant by specific heat capacity?

.....
.....

[1]

(ii) Calculate the specific heat capacity of substance K.

.....
.....
.....
.....

[2]

(b) An immersion heater was inserted in a large block of ice at 0°C. If the heater was rated at 150W and the specific heat capacity of fusion of ice is 300J/g, how long does it take to melt 10g of the ice?

.....
.....
.....
.....

[3]

6 **Figure 6.1** shows an electrical circuit containing two resistors.

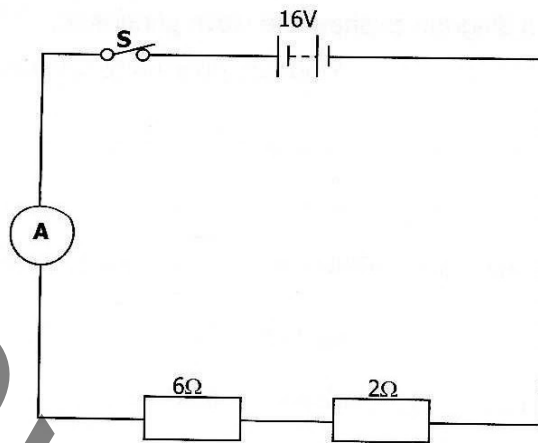


Figure 6.1

(a) (i) On the diagram above, draw a voltmeter to measure the potential difference across the 6Ω resistor. [1]

(ii) When the switch **S** is closed, calculate the current through the ammeter (**A**).

.....
 [2]

(b) (i) What is the potential difference across the 6Ω resistor?

 [2]

(ii) If the 6Ω resistor is replaced with two 4Ω resistors in parallel, find the current in the circuit.

 [3]

Total [8]

7 One end of a long spring was fixed to a wall. The free end of the spring is moved up and down.

(a) Draw a diagram to show the wave generated.

[2]

(b) Name the type of the wave generated.

[1]

(c) Describe the motion of a particle that is part of a

(i) longitudinal wave

[1]

(ii) transverse wave

[1]

Total [5]

8 Uranium $^{238}_{92}\text{U}$ decays to form a nucleus of thorium by emission of an alpha particle.

Thorium has the symbol, $^{234}_{90}\text{Th}$.

(a) What is the meaning of nucleon number?

.....
..... [1]

(b) State the proton number and nucleon number of an alpha particle.

Proton number.....

Nucleon number..... [2]

(c) Write a decay equation to show how Uranium $^{238}_{92}\text{U}$ decays to $^{234}_{90}\text{Th}$ after emitting an alpha particle.

.....
..... [2]

(d) Thorium -234 ($^{234}_{90}\text{Th}$) decays to an isotope of protoactinium (Pa) by beta decay. Write the decay equation to show this process.

.....
..... [2]

Total [7]

SECTION B

(45 marks)

There are **four (4)** questions in this section.

Answer any **three (3)** questions.

Each question carries 15 marks.

- 9**
- (a)** Define the lower fixed point and the upper fixed point of a laboratory thermometer. [2]
 - (b)** Describe how you would check for the accuracy of the fixed points on a mercury-in-glass thermometer. [3]
 - (c)** State the difference between heat and temperature. [2]
 - (d)** Draw and label a mercury-in-glass clinical thermometer. [4]
 - (e)** Explain why a clinical thermometer has a
 - (i)** Small bulb
 - (ii)** Constriction
 - (iii)** Bulb made of thin glass
 - (iv)** Short range [4]

Total [15]

10 (a) Describe an experiment which demonstrates that light is refracted when it passes through a denser medium. [5]

(b) **Figure 10.1** shows a table that was obtained from an experiment done to determine the refractive index of glass.

Angle of incidence (i)	Angle of refractive (r)	Sin i	Sin r
15°	10°		
30°	19°		
45°	28°		
60°	35°		
70°	39°		
80°	41°		

Figure 10.1

- (i)** Copy and complete the table. [3]
- (ii)** Plot a graph of $\sin i$ against $\sin r$. [3]
- (iii)** Using the graph, determine the refractive index (n) of the glass. [2]
- (iv)** Calculate the critical angle of the material above. [2]

Total [15]

- 11 (a) **Figure 11.1** below shows an electric kettle which is rated 2400W, 240V.

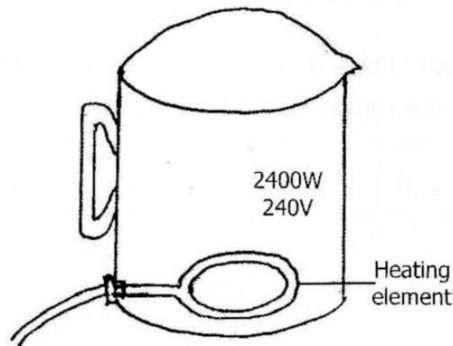


Figure 11.1

- (i) State the power rating of the kettle in kilowatts. [2]
 - (ii) How many units of electric energy would the kettle use in 4 hours when connected to a 240V mains? [2]
 - (iii) The cost of one unit of electricity is 30n. How much would it cost to use the kettle for four (4) hours? [3]
 - (iv) Calculate the current flowing through the element of the kettle when in use. [2]
 - (v) Suggest the size of a fuse suitable for the plug of this electric kettle. [2]
- (b) **Figure 11.2** below shows an electric kettle which is rated 2400W, 240V.

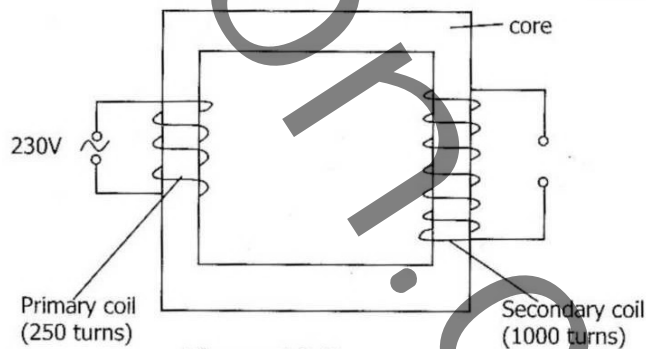


Figure 11.2

- (i) How can you tell from the diagram that this is a step-up transformer? [1]
- (ii) Calculate the output voltage of the transformer. [2]
- (iii) Suggest a suitable material that could have been used to make the core of the transformer. [1]

Total [15]

- 12 (a) Three locks are used to unlock a safe in a bank. The bank manager can unlock alone, or his assistant managers together or all of them. **Figure 12.1** shows the circuit which is used.

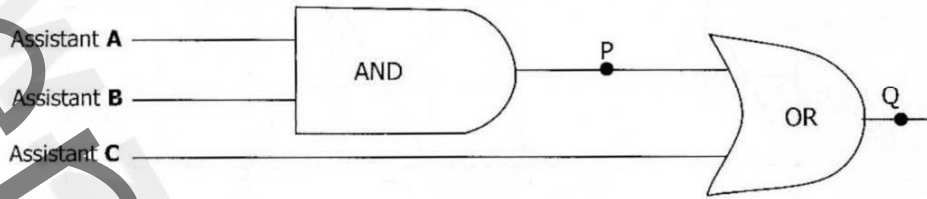


Figure 12.1

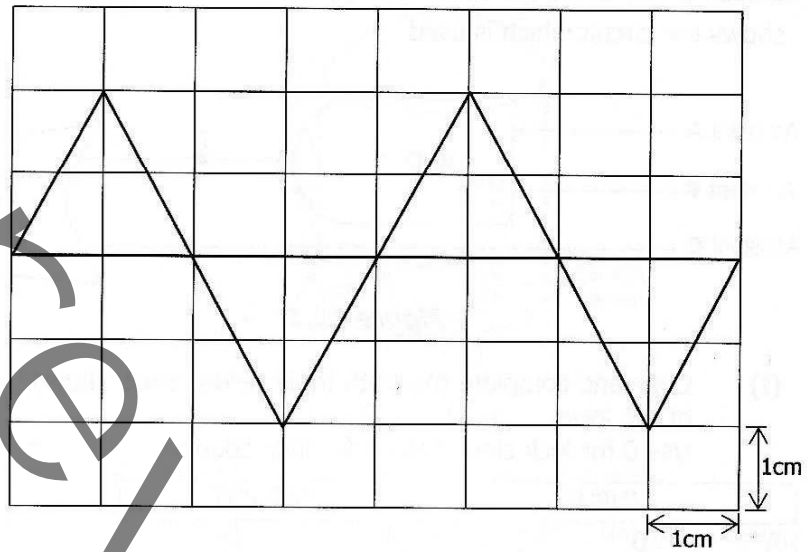
- (i) Copy and complete the truth table below which shows the operation of the locks. Use 0 for lock closed and 1 for lock opened. [2]

INPUT			OUTPUT	
A	B	C	P	Q
0	0	0		
0	0	1		
1	0	0		
0	1	0		
1	1	0		

- (ii) Briefly describe what should happen for the safe to open. [2]
 (iii) Describe the action of a NAND gate. [3]
 (iv) Copy and complete the truth table of a NAND gate. [2]

INPUT	INPUT	OUTPUT
A	B	P

(b) **Figure 12.2** below shows the waveform obtained on a Cathode Ray Oscilloscope (CRO)



Calculate the

- (i) Peak voltage
- (ii) Period of the wave
- (iii) Frequency of the wave

[6]

Total [15]