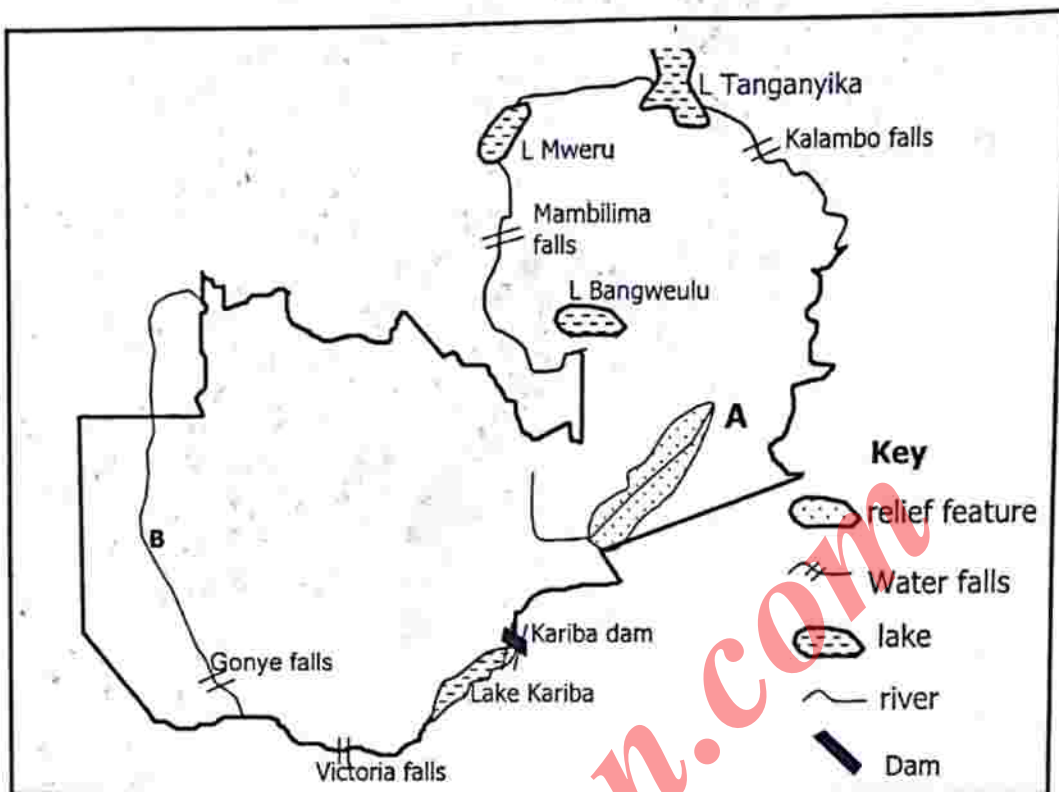


**Study the map extract of Kapiri Mposhi and answer questions 1 to 6.**

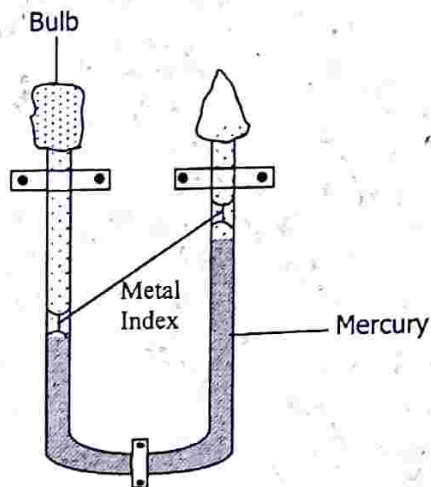
- 1 What is the six figure grid reference of Kapiri Glass Factory?  
A 633 799  
B 639 793  
C 793 639  
D 799 633
- 2 The distance along the Great North Road from the road junction in grid square 8060 to the unclassified trigonometrical station TT2 in grid square 8460 is ...  
A 3.4km.  
B 4.4km.  
C 5.4km.  
D 6.4km.
- 3 What is the height above sea level of the ZESCO substation in grid square 8056?  
A 1240 metres  
B 1260 metres  
C 1280 metres  
D 1300 metres
- 4 The bearing of the substation in grid square 8056 from Chekapu village in grid square 7758 is approximately ...  
A  $92^{\circ}$ .  
B  $118^{\circ}$ .  
C  $242^{\circ}$ .  
D  $315^{\circ}$ .
- 5 What is the general direction of the flow of Mushirabiri River?  
A North East to South West  
B North to South  
C South West to North East  
D South to North
- 6 According to map evidence, which of the following is the main function of Kapiri Mposhi town?  
A Business centre  
B Commercial centre  
C Military centre  
D Route focus

Study the map of Zambia below and answer questions 7 to 9.



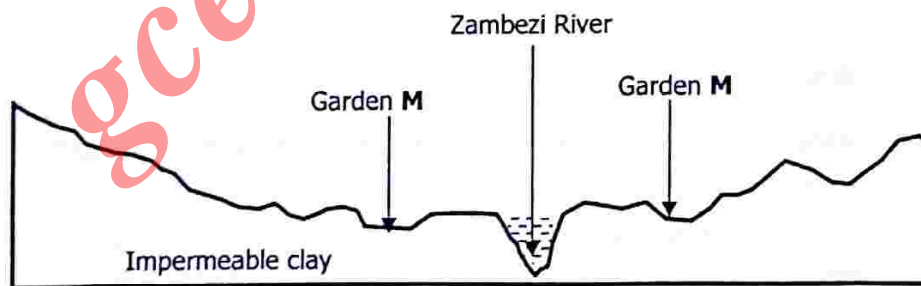
- 7 What is the name of the relief feature A?
- A Gwembe valley
  - B Luangwa valley
  - C Muchinga Escarpment
  - D Zambezi Escarpment
- 8 How many waterfalls are found across river B?
- A 1
  - B 2
  - C 3
  - D 4
- 9 The main purpose of building the Kariba Dam was to ...
- A create a large fishery.
  - B create an inland waterway.
  - C create a reservoir of hydro electric power.
  - D create scenic beauty of the area.

Study the diagram below and answer questions 10 and 11.



- 10 The weather instruments in the diagram is a ...
- A barometer.
  - B rain gauge.
  - C sunshine recorder.
  - D thermometer.
- 11 What is the name of the box which houses the instrument identified in question 10?
- A Collapsible metal box
  - B Balloon box
  - C Stevenson screen
  - D Weather station

Study the diagram below and answer questions 12 and 14.



Cross section along the Buluzi flood plain

- 12 What type of gardens are found at M?
- A Litapa
  - B Lishanjo
  - C Matongo
  - D Mazulu

- 13** Which of the following is a source of nutrients for gardens M?
- A** cow dung
  - B** Fertilizer
  - C** Human excreta
  - D** Silt
- 14** What type of farming system is associated with gardens M?
- A** Commercial farming
  - B** Shifting farming
  - C** Traditional farming
  - D** Truck farming.
- 15** During the production of hydroelectricity, water is made to run at high speed through pipes called ...
- A** dynamos.
  - B** turbines.
  - C** generators.
  - D** penstocks.
- 16** Which of the following is an example of a renewable source of energy?
- A** Coal
  - B** Gas
  - C** Oil
  - D** Water
- 17** Which of the following sources of energy is widely consumed in Zambia?
- A** Electricity
  - B** Petroleum
  - C** Solar
  - D** Wood
- 18** Which of the following birth control methods is widely used in Zambia?
- A** Late marriages
  - B** Moderate contraceptives
  - C** Natural family planning
  - D** Traditional herbs
- 19** One of the effects of rural-urban migration in rural areas is ...
- A** increased crime.
  - B** increased job opportunities.
  - C** reduced electricity production.
  - D** reduced food production.



- 20 Dependency ratio means the ...
- A age sex pyramid of a population.
  - B fertility rate of population.
  - C number of people relying on working population.
  - D rate of migration from rural to urban areas.
- 21 Which of the following methods is highly dependable to historians to gather information about the past?
- A Anthropology
  - B Archaeology
  - C Oral tradition
  - D Written records
- 22 The way to find out that an event happened before Christ was born is by counting years ...
- A backwards from the birth of Christ.
  - B backwards from the current year.
  - C forward from the birth of Christ.
  - D forward from current year.
- 23 Which of the following years was in the 17<sup>th</sup> century?
- A AD 1645
  - B AD 1782
  - C AD 1865
  - D AD 1921
- 24 According to people who study rocks, the first living things were seen in the ...
- A forest.
  - B mountains.
  - C sea.
  - D other planets.
- 25 Scientists believed that mammals might have developed ...
- A after the amphibians.
  - B at the same time as the amphibians.
  - C when dinosaurs appeared.
  - D when the weather became cooler.
- 26 Which of the following ancestors of man was able to make tools using his hands ...
- A Australopithecus.
  - B Homo-habilis.
  - C Kenyapithecus.
  - D Zinjathropus.

- 27 To which Stone Age period did the remains of the creature discovered in 1921 in Kabwe belong?
- A Early stone age
  - B Late stone age
  - C Middle stone age
  - D Nachikufu stone age
- 28 The Bushmen drawings showing things as they appeared in nature such as the domestic animals which they kept and those they hunted were called ...
- A crude paintings.
  - B engraving paintings.
  - C naturalistic painting.
  - D schematic painting.
- 29 Which pre-colonial kingdoms of Zambia are referred to as the Bantu-botatwe?
- A Bisa, Bemba and Ila
  - B Chewa, Ngoni and Tumbuka
  - C Tonga, Ila and Lenje
  - D Tonga, Lenje and Bisa
- 30 Societies where the king controlled power, collected tribute and had authority over trade were referred to as ...
- A centralised societies.
  - B decentralised societies.
  - C kingship societies.
  - D well organised societies.
- 31 To which Zambian tribe do the clans Bena Ng'andu (crocodile clan), Bena Bowa (Mushroom clan) and Bena Ng'uni (bird clan) belong?
- A Bemba
  - B Bisa
  - C Lamba
  - D Lenje
- 32 What name is given to the paramount chief of the Chewa people?
- A Kalonga Gawa Undi
  - B Makewane
  - C Mano
  - D Zwangendaba

- 33** Humanitarians such as William Wilberforce, Thomas Clarkson and Granville Sharp contributed to the ...
- A** abolition of slave trade.
  - B** development of long distance trade.
  - C** exploration of the interior of Africa.
  - D** scramble for Africa.
- 34** When was the Berlin colonial conference held?
- A** 1880 - 84
  - B** 1884 - 85
  - C** 1902 - 03
  - D** 1920 - 21
- 35** The African Seventh Day Baptist church in Mzimba was formed by ...
- A** Charles Domingo.
  - B** Elliot Kamwana.
  - C** Joseph Booth.
  - D** Willie Mokalapa.
- 36** The Rudd Concession was signed in ...
- A** February, 1887.
  - B** February, 1888.
  - C** October, 1887.
  - D** October, 1888.
- 37** Mungo Park was sent to Africa to explore the river ...
- A** Congo.
  - B** Gambia.
  - C** Niger.
  - D** Nile.
- 38** Some whites in Southern Rhodesia were opposed to the Federation of Central Africa because ...
- A** their fellow whites in the other territories were against the idea.
  - B** they hated the idea of federal government.
  - C** they saw nothing of economic benefit from Northern Rhodesia and Nyasaland.
  - D** they were scared of nationalist activities from Northern Rhodesia and Nyasaland.
- 39** Name a former trade unionist who became Zambia's second President in 1991.
- A** Dr Frederick T Chiluba
  - B** Dr Kenneth D Kaunda
  - C** Dr Levy P Mwanawasa
  - D** Mr Rupiah B Banda

- 40 When did independent Zambia celebrate her golden jubilee year?
- A 2011
  - B 2012
  - C 2013
  - D 2014
- 41 The aim of Civic Education is to provide information and learning experiences to equip and empower citizens to ...
- A learn about changes which have taken place in the communities.
  - B learn about how Zambia got her independence.
  - C learn about the earth as the home of man.
  - D participate in democratic processes.
- 42 Which political party was formed under Godwin Mbikusita Lewanika in 1948?
- A African National Congress (ANC)
  - B Northern Rhodesia African National Congress (NRAC)
  - C United National Independence Party (UNIP)
  - D Zambia African National Congress (ZANC)
- 43 The symbol that represents the freedom that we have in Zambia and our ability to solve our own problems is ...
- A eagle.
  - B pick.
  - C shaft.
  - D zebra.
- 44 A monarchy is a dictatorship ruled by a King or a Queen. However, not all monarchies are dictatorships. Which type of a monarch is a democracy?
- A Absolute monarchy
  - B Chieftom monarch
  - C Limited monarchy
  - D Unlimited monarchy
- 45 A method of adopting the constitution where citizens vote Yes or No is referred to as ...
- A constitutionalism.
  - B constitution conference.
  - C Referendum.
  - D Universal suffrage.
- 46 Gender roles are not influenced by biological factors but are ...
- A believed to be women's job.
  - B culturally determined.
  - C dominated by females.
  - D performed by males.
- 47 Which of the following prevent citizens from making democracy work?
- A Boycotting elections and other national events
  - B Expressing views in newspapers and radios
  - C Keeping the environment safe and clean
  - D Working for economic and social development



- 48 A system where more than two political parties actively participate in the politics of a country is called ...  
**A** multi-partism.  
**B** one party state.  
**C** political parties.  
**D** political system.
- 49 During the organisation of elections which stage comes between delimitation and nomination day?  
**A** Campaigning  
**B** Delimitation  
**C** Polling day  
**D** Registration of voters
- 50 Who is the chief administrative officer of the National Assembly?  
**A** Chief Whip  
**B** Clerk of the National Assembly  
**C** Sergeant at arms  
**D** Speaker of the National Assembly
- 51 Tax paid to the council by various workers within the council area every year is known as ...  
**A** customs duty.  
**B** income tax.  
**C** personal levy.  
**D** Value added tax.
- 52 During colonial rule, the chiefs lost independence and became Agents of the colonial masters. Name the system that the British used by ruling through traditional chiefs?  
**A** Democracy  
**B** Dictatorship  
**C** Direct rule  
**D** Indirect rule
- 53 The function of money which allows a customer to get an item from a shop and pay for it later is known as ...  
**A** measure of value.  
**B** medium of exchange.  
**C** means of deferred payment.  
**D** store of value.
- 54 Money spent on new projects such as construction of roads or building schools is known as ... expenditure.  
**A** capital  
**B** investment  
**C** recurrent  
**D** revenue

- 55 Mr Licolocolo is a foreigner whose services have been hired to work in Zambia and is paid in foreign currency, similarly Mr Kankuni is made to pay his tuition fees in foreign currency, such examples of trade are referred to as ...
- A balance of trade.
  - B foreign trade.
  - C invisible trade.
  - D visible trade.
- 56 All human rights are important to every human being. Which right allows citizens to freely say what they want as long as it is within the law? The right to ...
- A expression.
  - B liberty.
  - C movement.
  - D property.
- 57 Restrictions that are placed on those countries that sell fire arms to warring countries in order to prevent them from such actions are referred to as ...
- A conflict resolution.
  - B economic sanctions.
  - C peace education.
  - D Peace keeping.
- 58 The highest policy making organ of the Southern African Development Community (SADC) is the ...
- A assembly.
  - B secretariat.
  - C summit.
  - D tribunal.
- 59 Branches of the United Nation Organisation (UNO) that are related to the United Nations by special agreements are known as ...
- A related agencies.
  - B specialized agencies.
  - C sub-committees.
  - D voluntary agencies.
- 60 Which one of the following is **not** a bilateral donor agency?
- A Finnish International Development Agency
  - B International Monetary Fund
  - C Japan International Cooperation Agency
  - D Swedish International Development Agency